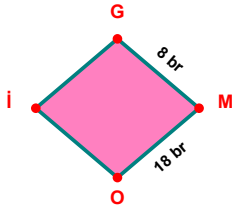
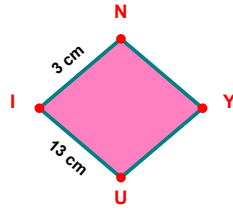


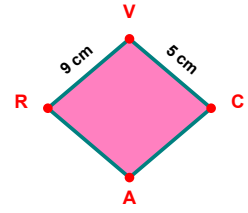
SORU: Aşağıdaki şekillerde verilen, kenar uzunlukları farklarını bulunuz.



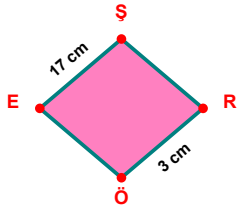
$$|MO| - |GM| = \dots\dots$$



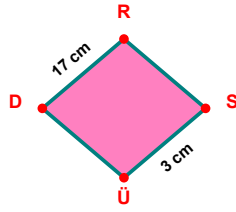
$$|UI| - |IN| = \dots\dots$$



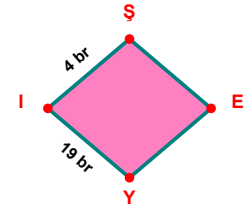
$$|RV| - |VC| = \dots\dots$$



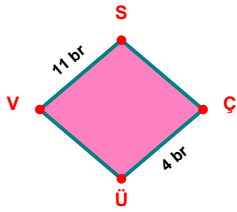
$$|EŞ| - |RÖ| = \dots\dots$$



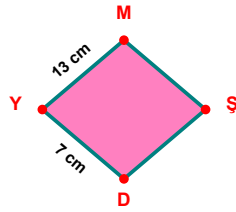
$$|DR| - |SÜ| = \dots\dots$$



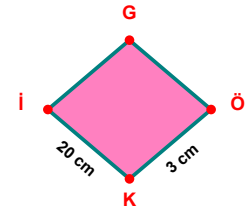
$$|Yİ| - |İŞ| = \dots\dots$$



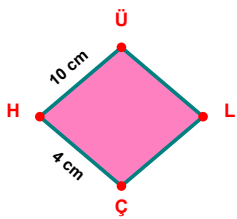
$$|VS| - |ÇÜ| = \dots\dots$$



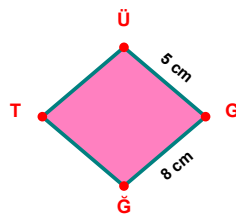
$$|YM| - |DY| = \dots\dots$$



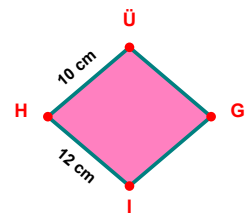
$$|Kİ| - |ÖK| = \dots\dots$$



$$|HÜ| - |ÇH| = \dots\dots$$

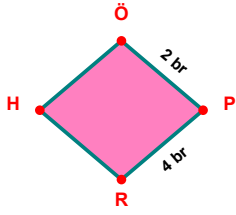


$$|GĞ| - |ÜG| = \dots\dots$$

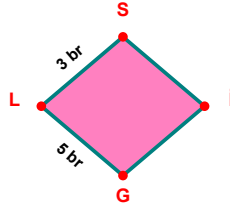


$$|İH| - |HÜ| = \dots\dots$$

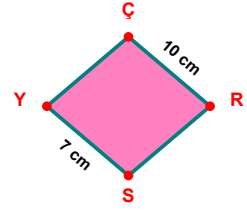
SORU: Aşağıdaki şekillerde verilen, kenar uzunlukları farklarını bulunuz.



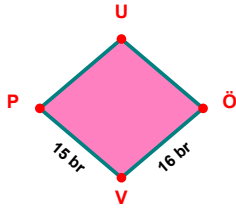
$$|PR| - |ÖP| = \dots\dots\dots$$



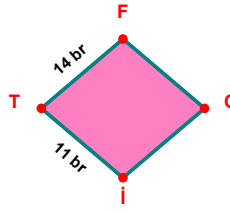
$$|GL| - |LS| = \dots\dots\dots$$



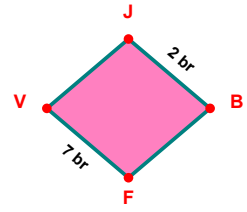
$$|ÇR| - |SY| = \dots\dots\dots$$



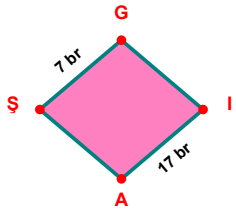
$$|ÖV| - |VP| = \dots\dots\dots$$



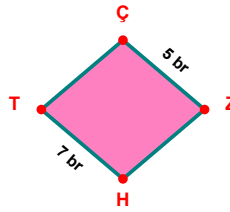
$$|TF| - |İT| = \dots\dots\dots$$



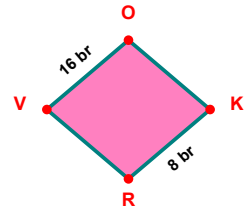
$$|FV| - |JB| = \dots\dots\dots$$



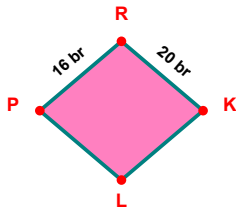
$$|IA| - |ŞG| = \dots\dots\dots$$



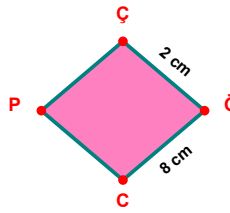
$$|HT| - |ÇZ| = \dots\dots\dots$$



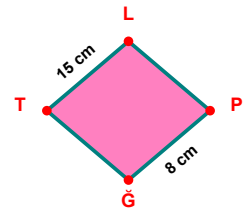
$$|VO| - |KR| = \dots\dots\dots$$



$$|RK| - |PR| = \dots\dots\dots$$



$$|ÖC| - |ÇÖ| = \dots\dots\dots$$



$$|TL| - |PG| = \dots\dots\dots$$

SÜREÇ ODAKLI DEĞERLENDİRME ÖLÇEĞİ

Doğru Sayısı: / 24

Öğretmen ilgili kutucuğu işaretler.

Geliştirilmeli (0-8)

İyi (9-14)

Çok İyi (15-20)

Mükemmel (21-24)

☐☐☐☐

Hazırlayan:

Bu bölüme sınıfınızın ilgili kazanıma yönelik genel durumuna ilişkin gözlem ve izlenimlerinizi, öğrencilerinizin bu kazanımla ilgili öğrenme eksikliklerini ve bu eksikliklerin giderilmesi amacıyla yaptığınız/yapmayı planladığınız faaliyetleri not edebilirsiniz.

No	Adı - Soyadı	Toplam Puan	Değerlendirme
1			
2			
3			
4			
5			
6			
7			
8			
9			
10			
11			
12			
13			
14			
15			
16			
17			
18			
19			
20			
21			
22			
23			
24			
25			
26			
27			
28			
29			
30			
31			
32			
33			
34			
35			

Hazırlayan: